




















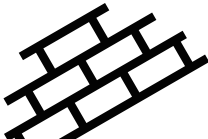



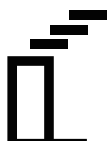



地図記号テスト-1

つぎの地図記号が何をあらわしているか、() の中に書きなさい。

			
()	()	()	()
			
()	()	()	()
		<div style="display: flex; justify-content: space-around; align-items: center;"> <div style="text-align: center;">(専) 文</div> <div style="text-align: center;">(短大) 文</div> <div style="text-align: center;">(大) 文</div> </div>	
()	()	()	()
			
()	()	()	()
			
()	()	()	()
			
()	()	()	()
			
()	()	()	()