









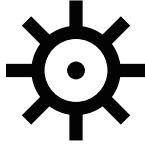





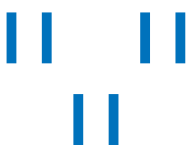
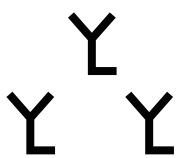


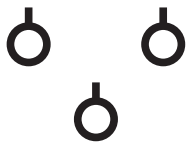
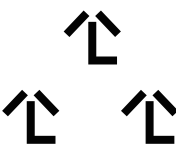
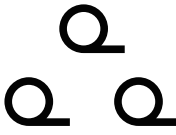


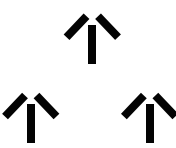

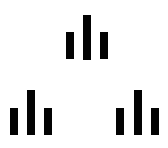


地図記号テスト-2

つぎの地図記号が何をあらわしているか、() の中に書きなさい。

 (発電所・変電所)	 (史跡・名勝・天然記念物)	 (電波塔)	 (墓地)
 (温泉)	 (高塔)	 (油井・ガス井)	 (噴火口・噴気孔)
 (城あと)	 (記念碑)	 (灯台)	 (重要港)
 (地方港)	 (漁港)	 (フェリー)	 (その他の旅客船)
 (田)	 (桑畑)	 (畑)	 (茶畑)
 (果樹園)	 (竹林)	 (広葉樹林)	 (針葉樹林)
 (ハイマツ地)	 (笹地)	 (その他の樹木畑)	 (荒地)