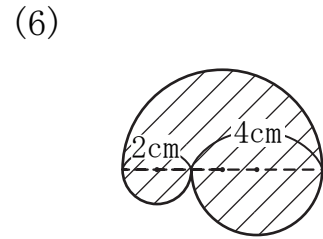
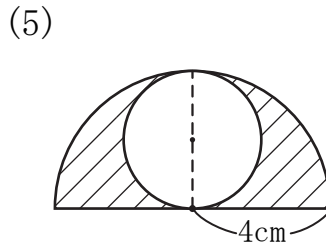
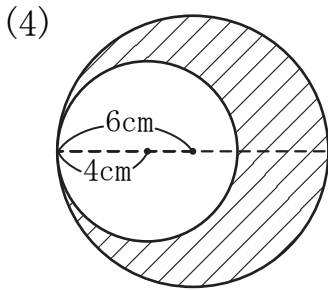
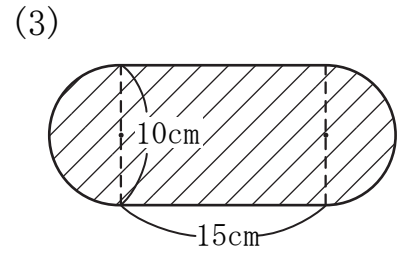
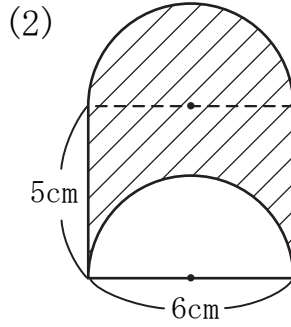
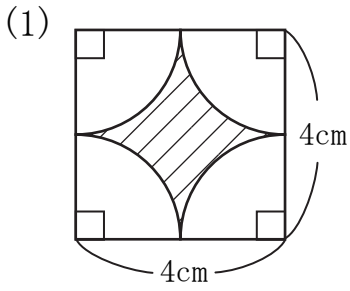


【1】 次のしや線の部分の面積を求めなさい。



(1) 式

(1) 答え \_\_\_\_\_

(2) 式

(2) 答え \_\_\_\_\_

(3) 式

(3) 答え \_\_\_\_\_

(4) 式

(4) 答え \_\_\_\_\_

(5) 式

(5) 答え \_\_\_\_\_

(6) 式

(6) 答え \_\_\_\_\_