
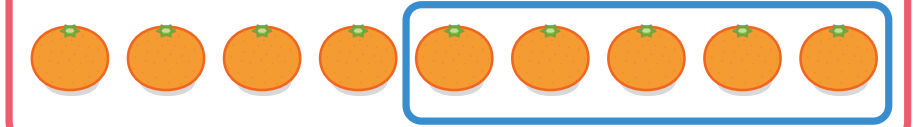


# 10までの かずの ひきざん


こたえが おなじに なる みぎと ひだりの ひきざんを せんで むすびましょう。




$$4 - 1 = 3$$




$$9 - 5 = 4$$




$$6 - 2 = 4$$



$$8 - 3 = 5$$



$$7 - 2 = 5$$



$$7 - 4 = 3$$