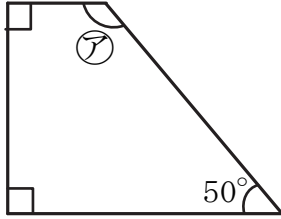


四角形・多角形の角 (4)

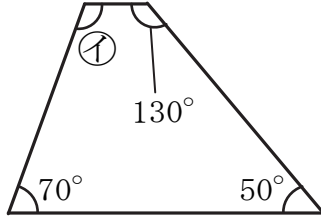
名前 _____

【1】 次の四角形の㉠～㉧の角度を求めなさい。

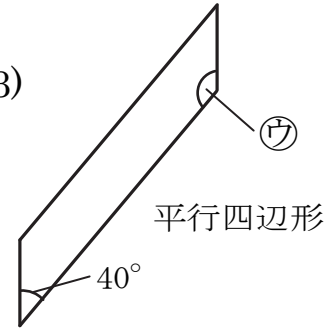
(1) 台形



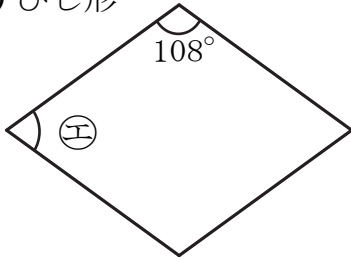
(2) 台形



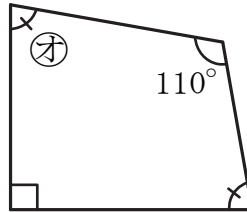
(3)



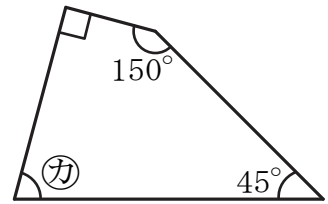
(4) ひし形



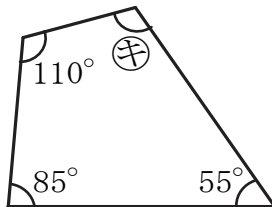
(5)



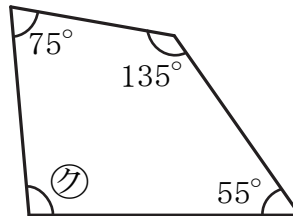
(6)



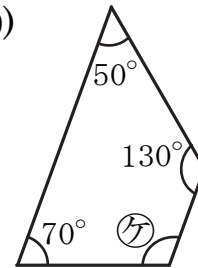
(7)



(8)



(9)



㉠ 式 _____

答え _____

㉡ 式 _____

答え _____

㉢ 式 _____

答え _____

㉣ 式 _____

答え _____

㉤ 式 _____

答え _____

㉥ 式 _____

答え _____

㉦ 式 _____

答え _____

㉧ 式 _____

答え _____

㉨ 式 _____

答え _____