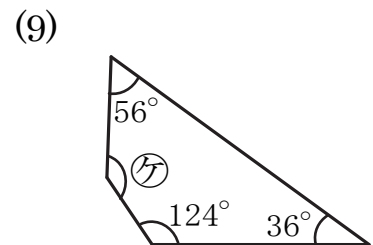
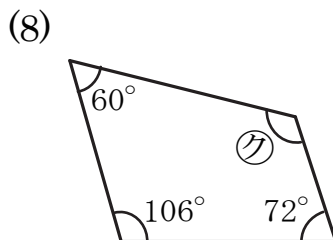
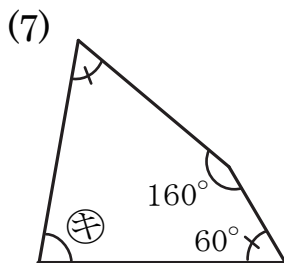
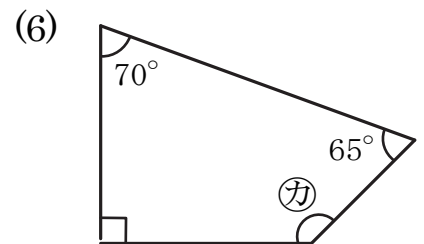
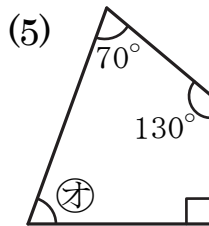
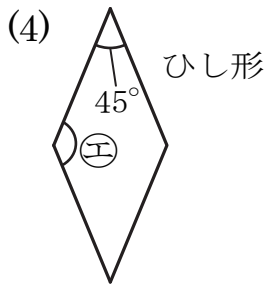
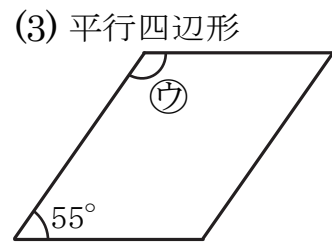
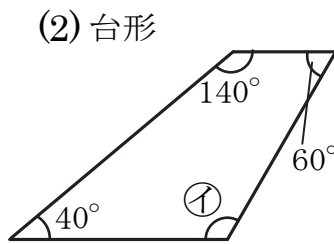
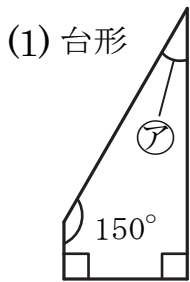


四角形・多角形の角 (5)

名前 _____

【1】 次の四角形の㉗～㉛の角度を求めなさい。



㉗ 式 _____

答え _____

㉘ 式 _____

答え _____

㉙ 式 _____

答え _____

㉚ 式 _____

答え _____

㉛ 式 _____

答え _____

㉜ 式 _____

答え _____

㉝ 式 _____

答え _____

㉞ 式 _____

答え _____

㉟ 式 _____

答え _____