

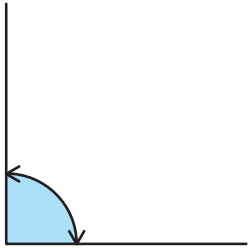
# 角度をはかる(1)

分度器の使い方

名前 \_\_\_\_\_

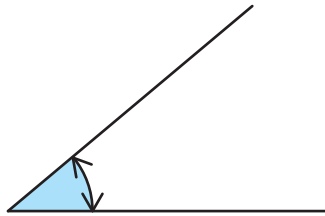
分度器を使って角度をもとめましょう。

(1)



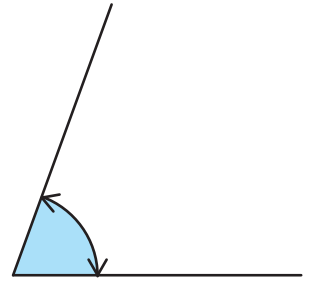
答え  $90^\circ$

(2)



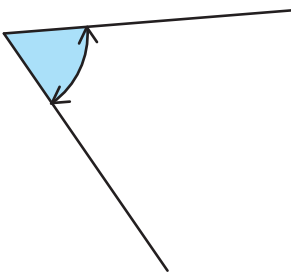
答え  $40^\circ$

(3)



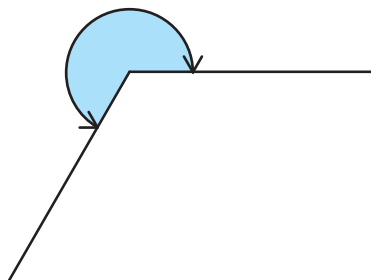
答え  $70^\circ$

(4)



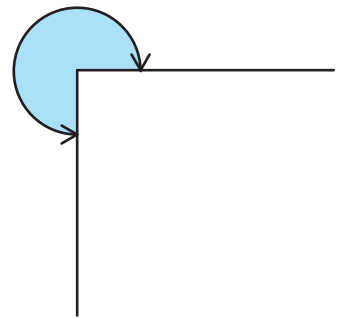
答え  $60^\circ$

(5)



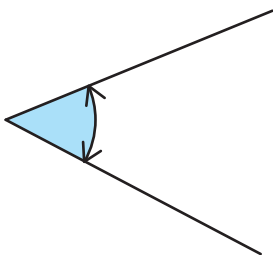
答え  $240^\circ$

(6)



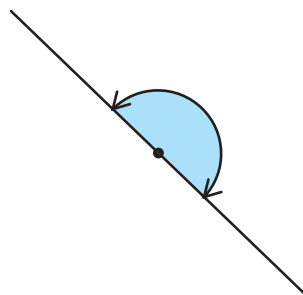
答え  $270^\circ$

(7)



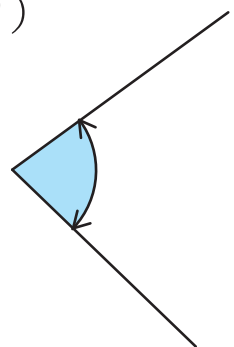
答え  $50^\circ$

(8)



答え  $180^\circ$

(9)



答え  $80^\circ$