

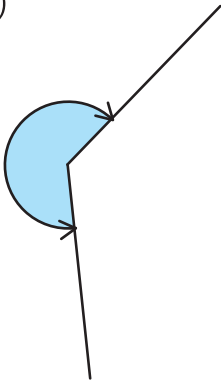
角度をはかる(2)

分度器の使い方

名前 _____

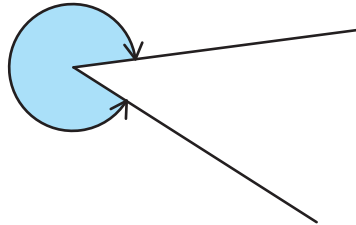
分度器を使って角度をもとめましょう。

(1)



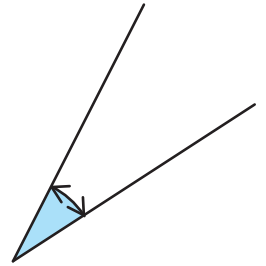
答え 230°

(2)



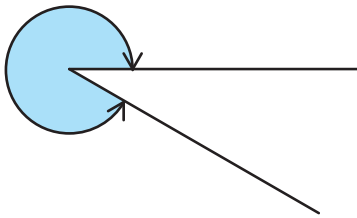
答え 320°

(3)



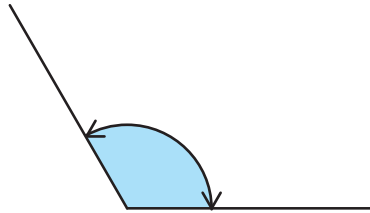
答え 30°

(4)



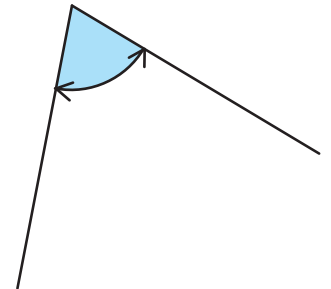
答え 330°

(5)



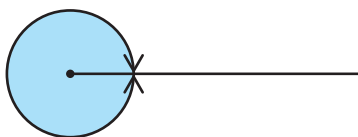
答え 120°

(6)



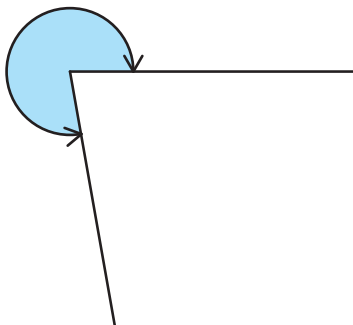
答え 70°

(7)



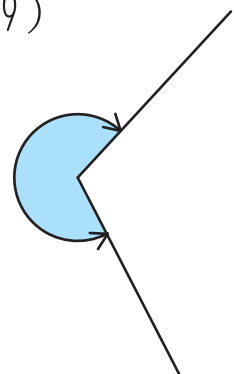
答え 360°

(8)



答え 280°

(9)



答え 250°