

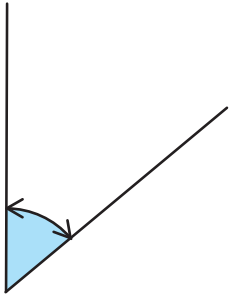
角度をはかる(3)

分度器の使い方

名前 _____

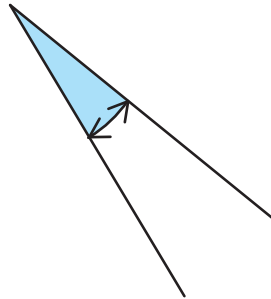
分度器を使って角度をもとめましょう。

(1)



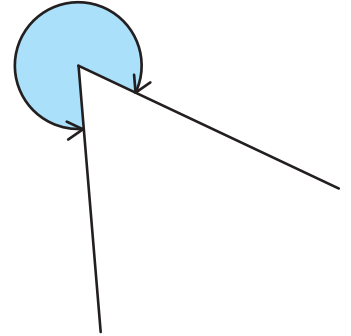
答え 50°

(2)



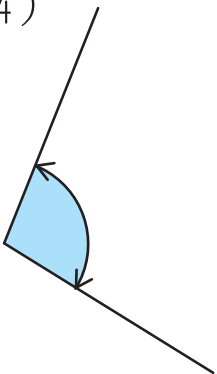
答え 20°

(3)



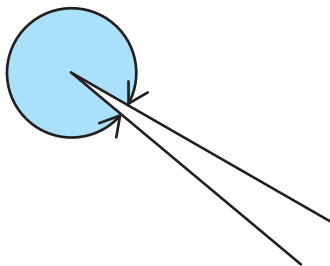
答え 300°

(4)



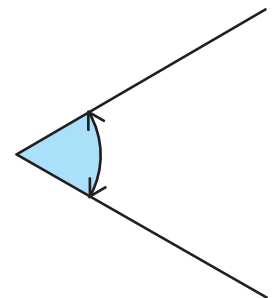
答え 100°

(5)



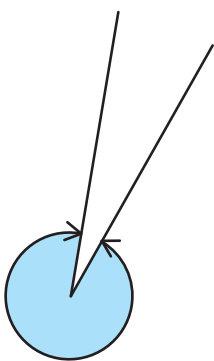
答え 350°

(6)



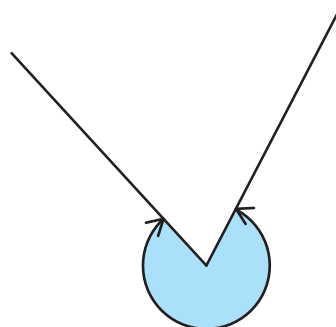
答え 60°

(7)



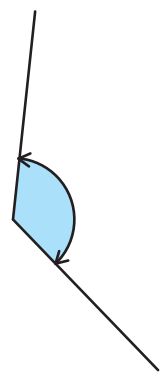
答え 340°

(8)



答え 290°

(9)



答え 130°