

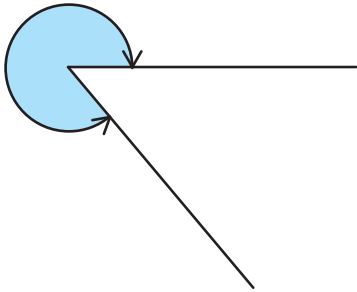
角度をはかる(4)

分度器の使い方

名前 _____

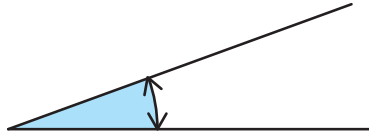
分度器を使って角度をもとめましょう。

(1)



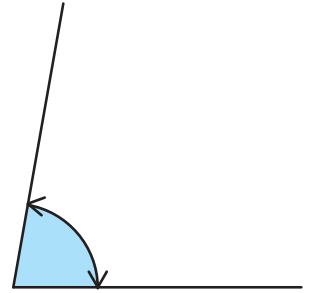
答え 310°

(2)



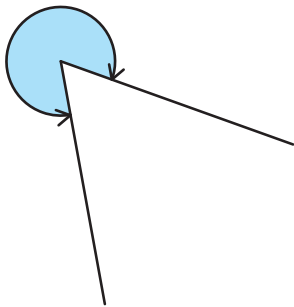
答え 20°

(3)



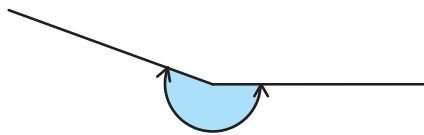
答え 80°

(4)



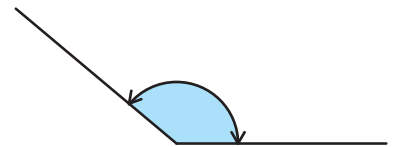
答え 300°

(5)



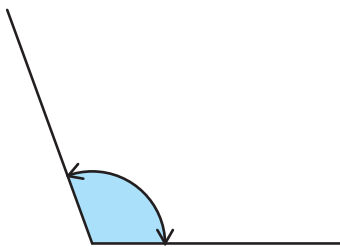
答え 200°

(6)



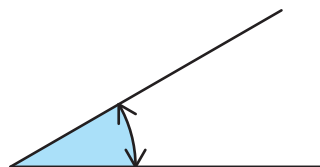
答え 140°

(7)



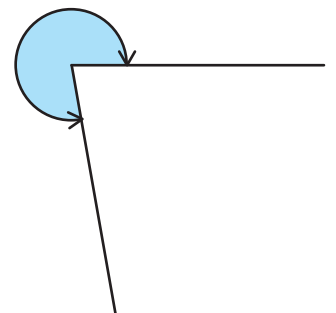
答え 110°

(8)



答え 30°

(9)



答え 280°