


角度をはかる(5)

分度器の使い方

名前 _____

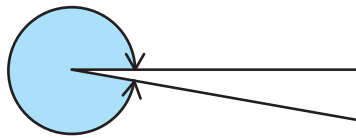
分度器を使って角度をもとめましょう。

(1)



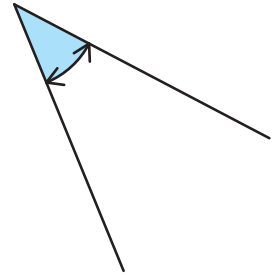
答え 100°

(2)




答え 350°

(3)



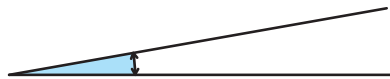
答え 40°

(4)



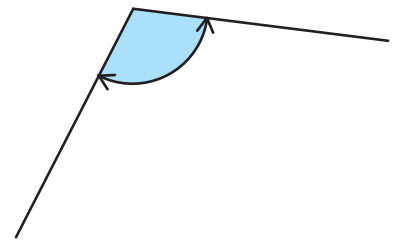
答え 260°

(5)



答え 10°

(6)



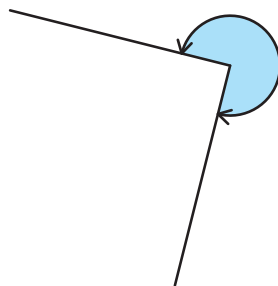
答え 110°

(7)



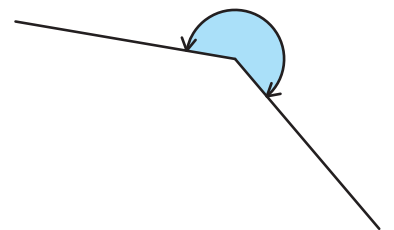
答え 150°

(8)



答え 270°

(9)



答え 220°