

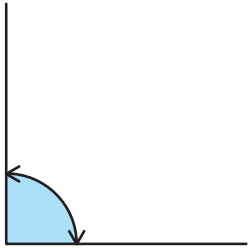
# 角度をはかる(1)

分度器の使い方

名前 \_\_\_\_\_

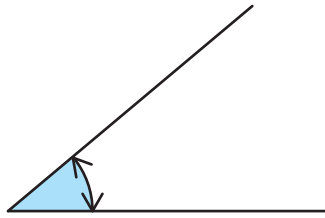
分度器を使って角度をもとめましょう。

(1)



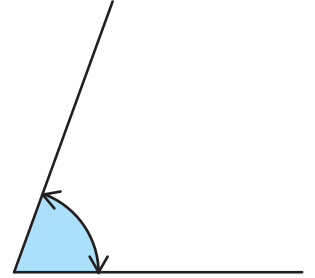
答え  $90^\circ$

(2)



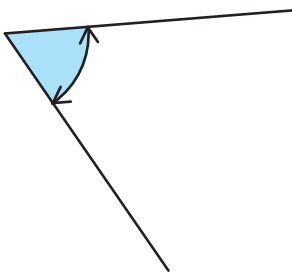
答え  $40^\circ$

(3)



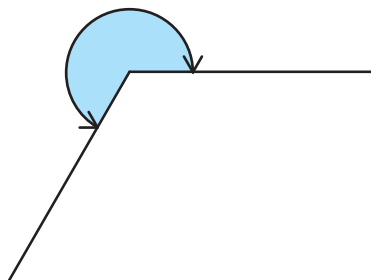
答え  $70^\circ$

(4)



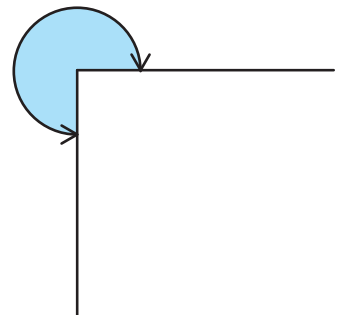
答え  $60^\circ$

(5)



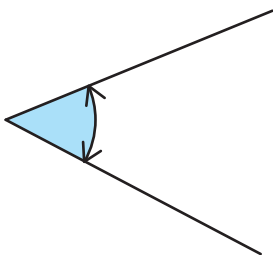
答え  $240^\circ$

(6)



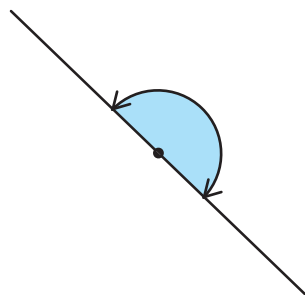
答え  $270^\circ$

(7)



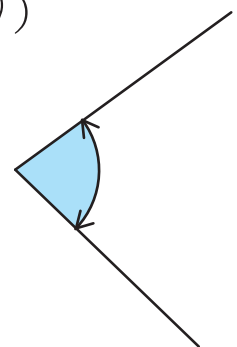
答え  $50^\circ$

(8)



答え  $180^\circ$

(9)



答え  $80^\circ$

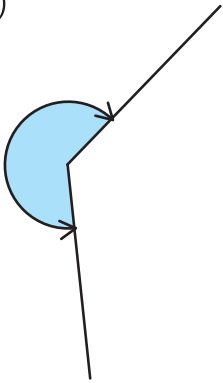
# 角度をはかる(2)

分度器の使い方

名前 \_\_\_\_\_

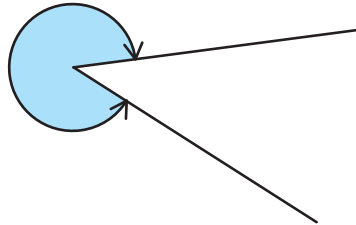
分度器を使って角度をもとめましょう。

(1)



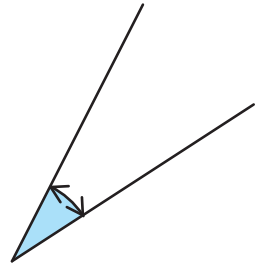
答え  $230^\circ$

(2)



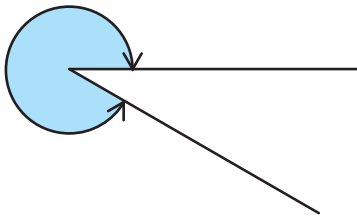
答え  $320^\circ$

(3)



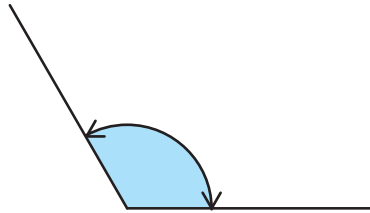
答え  $30^\circ$

(4)



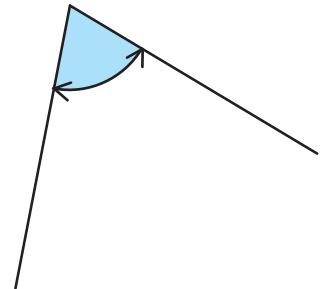
答え  $330^\circ$

(5)



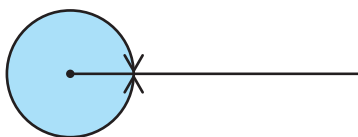
答え  $120^\circ$

(6)



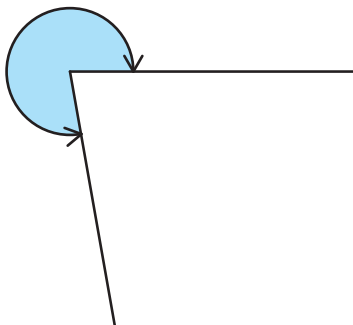
答え  $70^\circ$

(7)



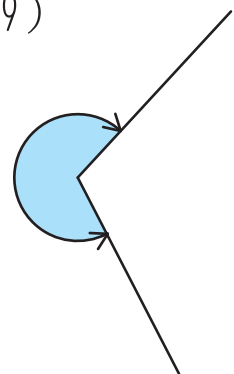
答え  $360^\circ$

(8)



答え  $280^\circ$

(9)



答え  $250^\circ$

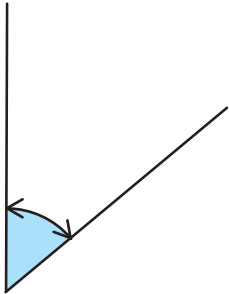
# 角度をはかる(3)

分度器の使い方

名前 \_\_\_\_\_

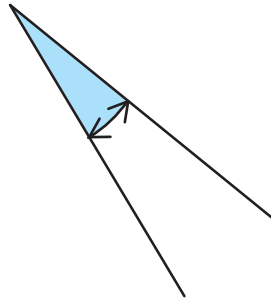
分度器を使って角度をもとめましょう。

(1)



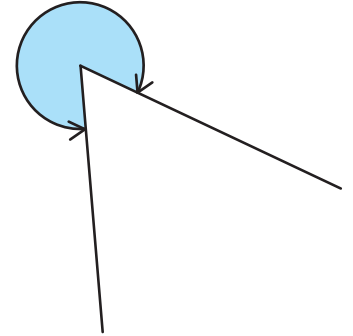
答え  $50^\circ$

(2)



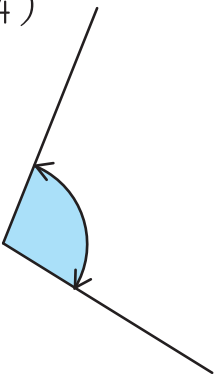
答え  $20^\circ$

(3)



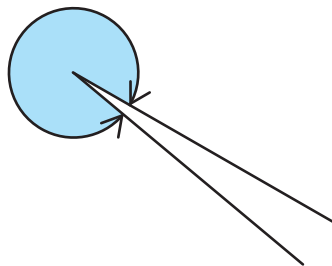
答え  $300^\circ$

(4)



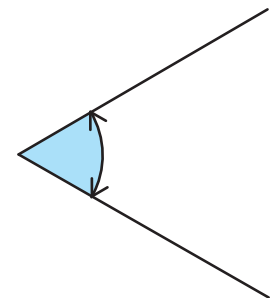
答え  $100^\circ$

(5)



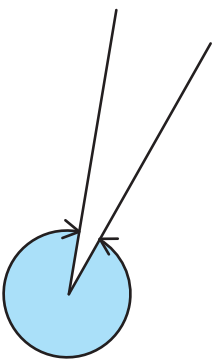
答え  $350^\circ$

(6)



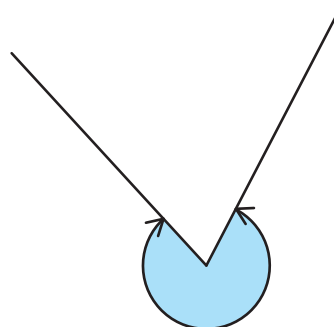
答え  $60^\circ$

(7)



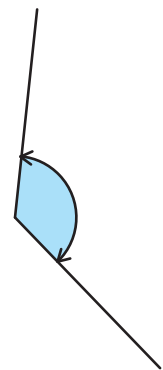
答え  $340^\circ$

(8)



答え  $290^\circ$

(9)



答え  $130^\circ$

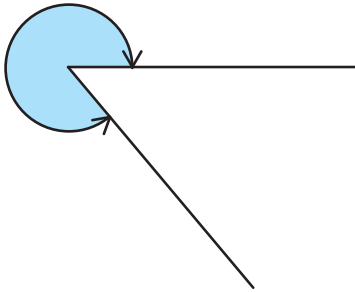
# 角度をはかる(4)

分度器の使い方

名前 \_\_\_\_\_

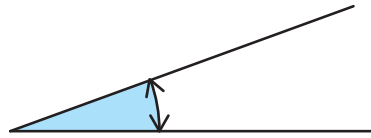
分度器を使って角度をもとめましょう。

(1)



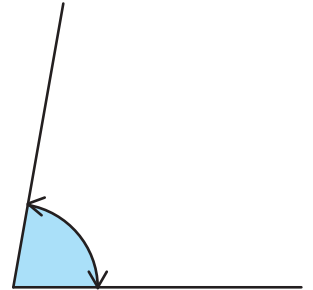
答え  $310^\circ$

(2)



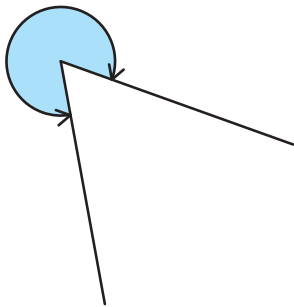
答え  $20^\circ$

(3)



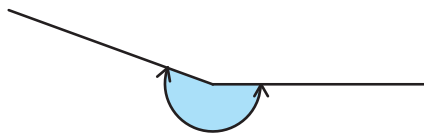
答え  $80^\circ$

(4)



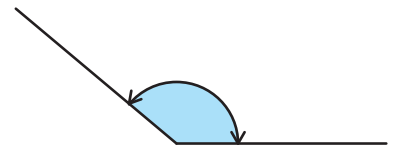
答え  $300^\circ$

(5)



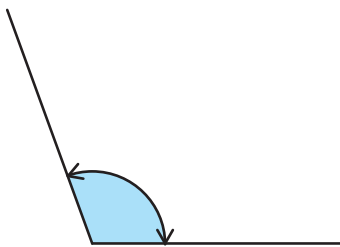
答え  $200^\circ$

(6)



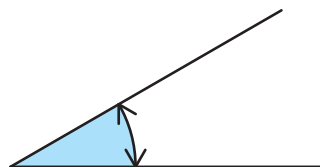
答え  $140^\circ$

(7)



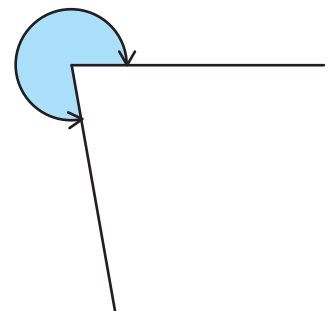
答え  $110^\circ$

(8)



答え  $30^\circ$

(9)



答え  $280^\circ$


# 角度をはかる(5)

分度器の使い方

名前 \_\_\_\_\_

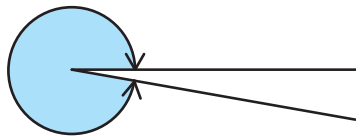
分度器を使って角度をもとめましょう。

(1)



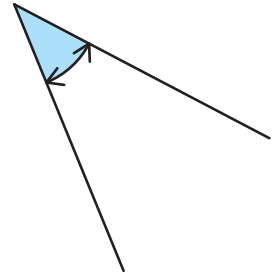
答え  $100^\circ$

(2)




答え  $350^\circ$

(3)



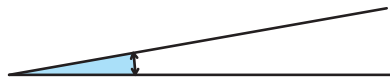
答え  $40^\circ$

(4)



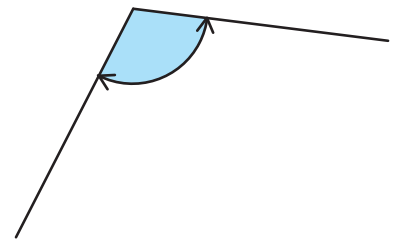
答え  $260^\circ$

(5)



答え  $10^\circ$

(6)



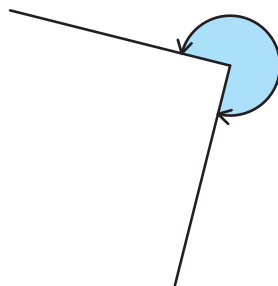
答え  $110^\circ$

(7)



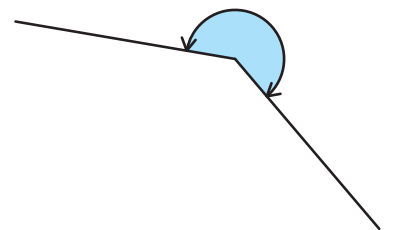
答え  $150^\circ$

(8)



答え  $270^\circ$

(9)



答え  $220^\circ$