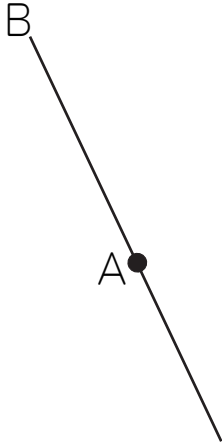


垂直な線・平行な線を引く練習 (4)

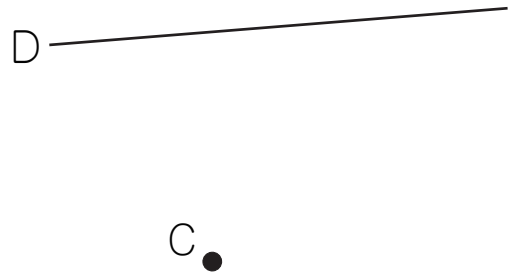
名前 _____

点Aをとって、線Bに垂直な直線を三角定規じょうぎを使ってかきましょう。
点Cをとって、線Dに平行な直線を三角定規を使ってかきましょう。

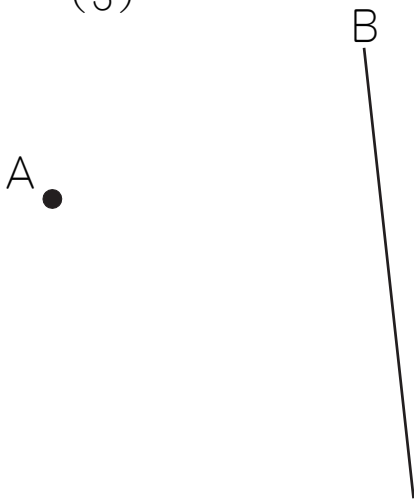
(1)



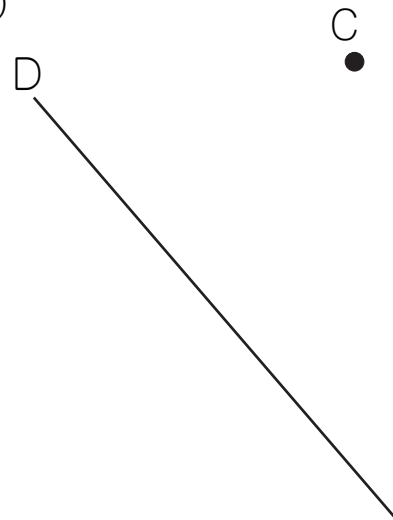
(2)



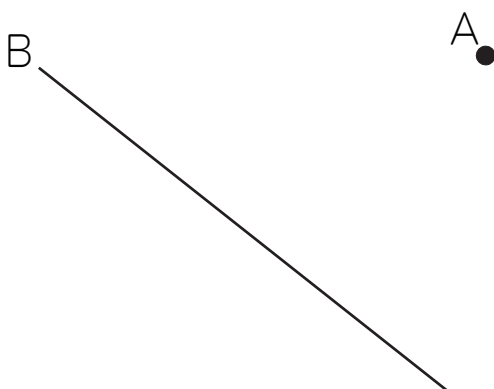
(3)



(4)



(5)



(6)

