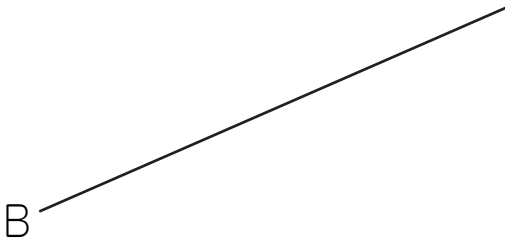


垂直な線・平行な線を引く練習 (5)

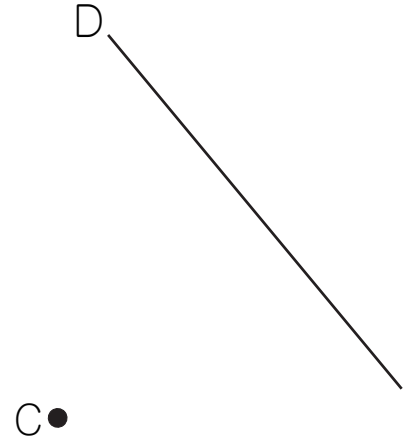
名前 _____

点Aをとって、線Bに垂直な直線を三角定規^{じょうぎ}を使ってかきましょう。
点Cをとって、線Dに平行な直線を三角定規を使ってかきましょう。

(1) A●

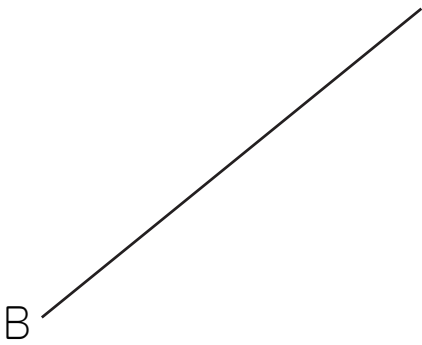


(2)

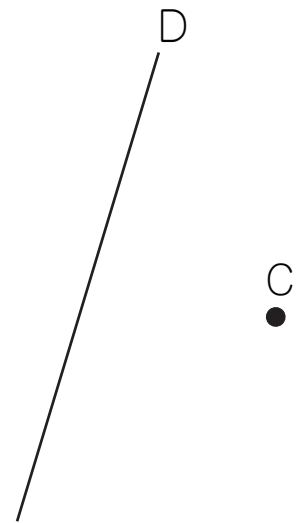


(3)

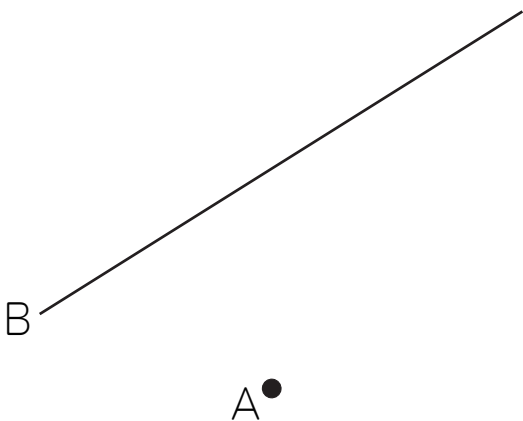
A●



(4)



(5)



(6)

